
UNIVERSITI SAINS MALAYSIA

Second Semester Examination
Academic Session 2007/2008

April 2008

ZCT 304/3 – Electricity and Magnetism
[Keelektrikan dan Kemagnetan]

Duration: 3 hours
[Masa : 3 jam]

Please ensure that this examination paper contains **NINE** printed pages before you begin the examination.

*[Sila pastikan bahawa kertas peperiksaan ini mengandungi **SEMBILAN** muka surat yang bercetak sebelum anda memulakan peperiksaan ini.]*

Instruction: Answer all **FIVE** questions. Students are allowed to answer all questions in Bahasa Malaysia or in English.

Arahan: *Jawab semua **LIMA** soalan. Pelajar dibenarkan menjawab semua soalan sama ada dalam Bahasa Malaysia atau Bahasa Inggeris.]*

1. (a) Three point charges are situated at the corners of a square (side a), as shown in Fig. 1 below. Find the electric field \vec{E} and the electric potential V at the fourth corner.
[Tiga cas titik terletak di pepenjuru-pepenjuru satu segi empat sama (sisi a) seperti yang ditunjukkan dalam Rajah 1 di bawah. Cari medan elektrik \vec{E} dan keupayaan elektrik V di pepenjuru yang keempat.]
- (b) How much work does it take to bring in another charge, $+q$, from far away and place in the fourth corner?
[Berapakah kerja yang diperlukan untuk membawa satu lagi cas, $+q$, dari jarak yang jauh dan meletakkannya di pepenjuru keempat?]
- (c) Calculate the amount of work needed to assemble the whole configuration of four charges.
[Hitung amaun kerja yang diperlukan untuk membina keseluruhan konfigurasi empat cas ini.]

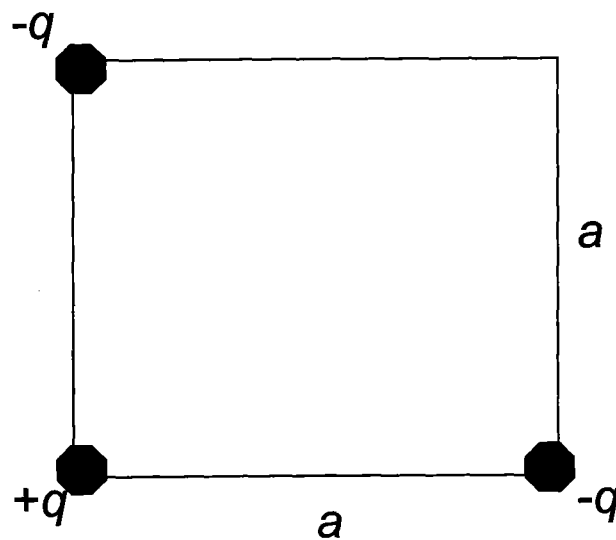


Figure 1 [Rajah 1]

(20 marks/markah)

2. A parallel plate conductor has been charged such that the lower plate has electric potential $V(x=0)=0$ and the upper plate $V(x=d)=V_0$. The space between the conductor is filled with charges of density $\rho(x)=\alpha x+\rho_0$ (α and ρ_0 are constants).
[Satu plat konduktor selari telah dicas sehingga plat bawah mempunyai keupayaan elektrik $V(x=0)=0$ dan bagi plat bahagian atas $V(x=d)=V_0$. Ruang di antara plat telah diisi dengan cas dengan ketumpatan cas $\rho(x)=\alpha x+\rho_0$ (α dan ρ_0 adalah pemalar).]

...3/-

- (a) Find the electric potential $V(x)$ in the region $0 < x < d$.
[Cari keupayaan elektrik $V(x)$ di kawasan $0 < x < d$.]
- (b) Calculate the electric field \vec{E} in this region. Sketch a graph of $|\vec{E}|$ versus x ($0 \leq x \leq d$).
[Hitung medan elektrik \vec{E} di kawasan ini. Lakarkan graf $|\vec{E}|$ melawan x ($0 \leq x \leq d$).]
- (c) What is the surface charge density on each plate?
[Apakah ketumpatan permukaan cas pada setiap plat?]




Figure 2 [Rajah 2]

(20 marks/markah)

3. A sphere of radius a carries a uniformly distributed charge Q . It is surrounded, out to radius b , by a linear dielectric material of relative electric permittivity $\epsilon_r = \kappa$. Please refer to Fig. 3 below.
[Satu sfera berjejari a membawa cas Q yang bertabur seragam. Ia disaluti sehingga ke jejari b , oleh satu bahan dielektrik linear dengan pemalar ketelusan elektrik $\epsilon_r = \kappa$. Sila rujuk Rajah 3 di bawah.]

- 4 -

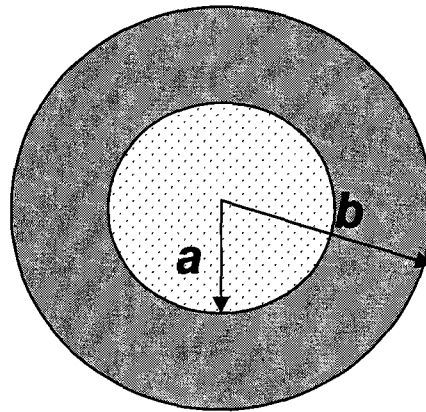


Figure 3 [Rajah 3]

- (a) Using the Gauss' law find the electric field in the following regions:
 [Dengan menggunakan hukum Gauss cari medan elektrik pada kawasan-kawasan yang berikut:]
- (i) $r < a$, (ii) $a < r < b$, and [dan] (iii) $r > b$
- (b) Find the polarization \vec{P} in the region $a \leq r \leq b$ and then calculate the volume bound charge density ρ_b , dan surface bound charge density σ_b on each surface $r = a$ and $r = b$.
 [Cari pengkutuban \vec{P} pada kawasan $a \leq r \leq b$ dan kemudian hitung ketumpatan isipadu cas terikat ρ_b , ketumpatan permukaan cas terikat σ_b di setiap permukaan $r = a$ and $r = b$.]
- (c) Calculate the amount of energy W stored in this configuration of system.
 [Hitung amaun tenaga W yang tersimpan di dalam konfigurasi sistem ini.]
 (20 marks/markah)
4. (a) Two long coaxial solenoids each carries current I , but in opposite directions, as shown in Fig. 4. The inner solenoid (radius a) has n_1 turns per unit length, and the outer one (radius b) has n_2 . Find \vec{B} in each of the three regions:
 [Dua solenoid yang panjang dan sepaksi setiap satu membawa arus I , tetapi di arah yang berlawanan, seperti yang ditunjukkan dalam Rajah 4. Solenoid bahagian dalam (jejari a) mempunyai n_1 bilangan lilitan per unit panjang, dan solenoid bahagian luar (jejari b) mempunyai n_2 bilangan lilitan per unit panjang. Dapatkan \vec{B} di setiap tiga kawasan yang berikut:]

- 5 -

- (i) inside the inner solenoid,
[di dalam solenoid bahagian dalam,]
- (ii) between them, and
[di antara kedua solenoid, and]
- (iii) outside both.
[di bahagian luar keduanya.]




Figure 4 [Rajah 4]

- (b) If the inner solenoid is filled with a linear insulating magnetic material of magnetic susceptibility χ_m , find magnetization \vec{M} , and the density of bound currents \vec{K}_b and \vec{J}_b .

[Jika solenoid dalam diisi oleh satu bahan magnet penebat dan linear dengan ketelusan magnet χ_m , dapatkan pemagnetan \vec{M} , dan ketumpatan-ketumpatan arus terikat \vec{K}_b dan \vec{J}_b .]

(20 marks/markah)

5. (a) If an induced electromotance for a certain circuit is $\varepsilon = -\frac{d}{dt}\Phi_B$ where Φ_B is the magnetic flux over the surface area of the circuit, show that ε obeys the relation $\varepsilon = -\frac{d}{dt} \oint_C \vec{A} \cdot d\vec{\ell}$. \vec{A} is the magnetic vector potential.

[Jika aruhan elektromotans bagi suatu litar adalah $\varepsilon = -\frac{d}{dt}\Phi_B$ di mana Φ_B adalah fluks magnet yang melalui/menembusi permukaan litar, tunjukkan bahawa ε juga mematuhi persamaan berikut $\varepsilon = -\frac{d}{dt} \oint_C \vec{A} \cdot d\vec{\ell}$. \vec{A} adalah vektor keupayaan magnet.]

- (b) Consider two circuits (refer to Fig. 5) consisting of an infinitely long wire carrying a current I_1 and a rectangular coil lying in the same plane as the wire.

[Pertimbangkan dua litar (lihat Rajah 5) yang terdiri dari satu dawai pembawa arus I_1 yang sangat panjang dan satu gelung berbentuk segi empat yang berada pada satah yang sama dengan dawai tadi.]

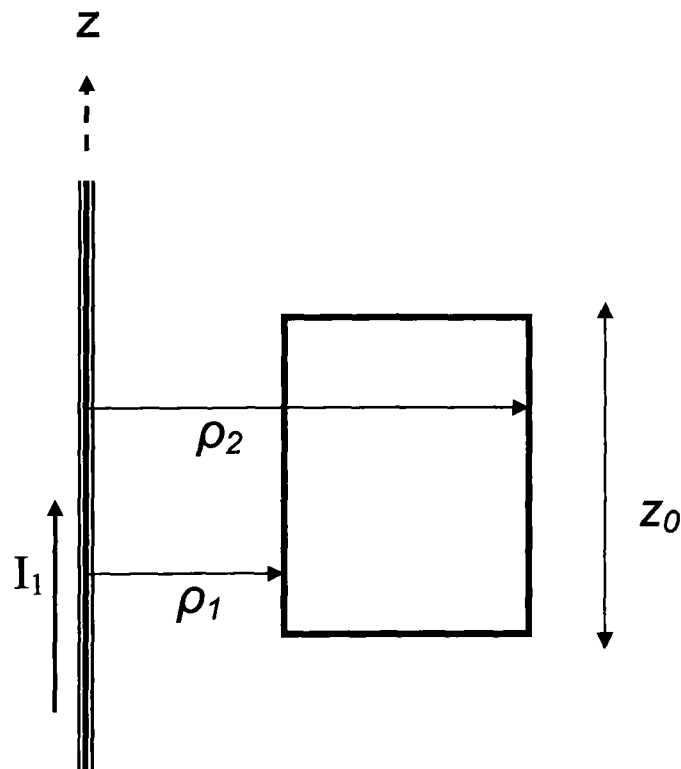


Figure 5 [Rajah 5]

- (i) Calculate \vec{B} produced by the wire at a distance ρ from it.
[Hitung \vec{B} yang dihasilkan oleh dawai pada jarak ρ dari dawai.]
- (ii) Calculate \vec{A} in the region between ρ_1 and ρ_2 .
[Hitung \vec{A} di kawasan antara ρ_1 dan ρ_2 .]
- (iii) If I_1 varies with time according to $I_1(t) = I_0 \cos(\omega t + \pi)$, calculate the induced electromotance, ϵ , in the rectangular coil. Using Lenz' law, what is the direction of ϵ ?
[Jika I_1 berfungskikan masa mengikut $I_1(t) = I_0 \cos(\omega t + \pi)$, hitung elektromotans, ϵ , yang teraruh pada gelung segi empat tersebut. Dengan menggunakan hukum Lenz, apakah arah ϵ ?]

(20 marks/markah)

...7/-

Vector Derivatives

Cartesian Coordinates

$$d\ell = \hat{i}dx + \hat{j}dy + \hat{k}dz, \quad dV = dx dy dz$$

$$\nabla f = \hat{i} \frac{\partial f}{\partial x} + \hat{j} \frac{\partial f}{\partial y} + \hat{k} \frac{\partial f}{\partial z}$$

$$\nabla \cdot \mathbf{A} = \frac{\partial A_x}{\partial x} + \frac{\partial A_y}{\partial y} + \frac{\partial A_z}{\partial z}$$

$$\nabla \times \mathbf{A} = \hat{i} \left(\frac{\partial A_z}{\partial y} - \frac{\partial A_y}{\partial z} \right) + \hat{j} \left(\frac{\partial A_x}{\partial z} - \frac{\partial A_z}{\partial x} \right) + \hat{k} \left(\frac{\partial A_y}{\partial x} - \frac{\partial A_x}{\partial y} \right)$$

$$\nabla^2 f = \frac{\partial^2 f}{\partial x^2} + \frac{\partial^2 f}{\partial y^2} + \frac{\partial^2 f}{\partial z^2}$$

Cylindrical Coordinates

$$d\ell = \hat{r}dr + \hat{\phi}r d\phi + \hat{k}dz, \quad dV = r dr d\phi dz$$

$$\nabla f = \hat{r} \frac{\partial f}{\partial r} + \hat{\phi} \frac{1}{r} \frac{\partial f}{\partial \phi} + \hat{k} \frac{\partial f}{\partial z}$$

$$\nabla \cdot \mathbf{A} = \frac{1}{r} \frac{\partial}{\partial r} (r A_r) + \frac{1}{r} \frac{\partial A_\phi}{\partial \phi} + \frac{\partial A_z}{\partial z}$$

$$\nabla \times \mathbf{A} = \hat{r} \left(\frac{1}{r} \frac{\partial A_z}{\partial \phi} - \frac{\partial A_\phi}{\partial z} \right) + \hat{\phi} \left(\frac{\partial A_r}{\partial z} - \frac{\partial A_z}{\partial r} \right) + \hat{k} \left[\frac{1}{r} \frac{\partial}{\partial r} (r A_\phi) - \frac{1}{r} \frac{\partial A_r}{\partial \phi} \right]$$

$$\nabla^2 f = \frac{1}{r} \frac{\partial}{\partial r} \left(r \frac{\partial f}{\partial r} \right) + \frac{1}{r^2} \frac{\partial^2 f}{\partial \phi^2} + \frac{\partial^2 f}{\partial z^2}$$

Spherical Coordinates

$$d\ell = \hat{r}dr + \hat{\theta}r d\theta + \hat{\phi}r \sin\theta d\phi, \quad dV = r^2 \sin\theta dr d\theta d\phi$$

$$\nabla f = \hat{r} \frac{\partial f}{\partial r} + \hat{\theta} \frac{1}{r} \frac{\partial f}{\partial \theta} + \hat{\phi} \frac{1}{r \sin\theta} \frac{\partial f}{\partial \phi}$$

$$\nabla \cdot \mathbf{A} = \frac{1}{r^2} \frac{\partial}{\partial r} (r^2 A_r) + \frac{1}{r \sin\theta} \frac{\partial}{\partial \theta} (\sin\theta A_\theta) + \frac{1}{r \sin\theta} \frac{\partial A_\phi}{\partial \phi}$$

$$\nabla \times \mathbf{A} = \frac{\hat{r}}{r \sin\theta} \left[\frac{\partial}{\partial \theta} (\sin\theta A_\phi) - \frac{\partial A_\theta}{\partial \phi} \right] + \frac{\hat{\theta}}{r} \left[\frac{1}{\sin\theta} \frac{\partial A_r}{\partial \phi} - \frac{\partial}{\partial r} (r A_\phi) \right] + \frac{\hat{\phi}}{r} \left[\frac{\partial}{\partial r} (r A_\theta) - \frac{\partial A_r}{\partial \theta} \right]$$

$$\nabla^2 f = \frac{1}{r^2} \frac{\partial}{\partial r} \left(r^2 \frac{\partial f}{\partial r} \right) + \frac{1}{r^2 \sin\theta} \frac{\partial}{\partial \theta} \left(\sin\theta \frac{\partial f}{\partial \theta} \right) + \frac{1}{r^2 \sin^2\theta} \frac{\partial^2 f}{\partial \phi^2}$$

Vector Formulas

$$\mathbf{A} \cdot (\mathbf{B} \times \mathbf{C}) = (\mathbf{A} \times \mathbf{B}) \cdot \mathbf{C} = \mathbf{C} \cdot (\mathbf{A} \times \mathbf{B}) = (\mathbf{C} \times \mathbf{A}) \cdot \mathbf{B} = \mathbf{B} \cdot (\mathbf{C} \times \mathbf{A})$$

$$\mathbf{A} \times (\mathbf{B} \times \mathbf{C}) = \mathbf{B}(\mathbf{A} \cdot \mathbf{C}) - \mathbf{C}(\mathbf{A} \cdot \mathbf{B})$$

$$(\mathbf{A} \times \mathbf{B}) \cdot (\mathbf{C} \times \mathbf{D}) = (\mathbf{A} \cdot \mathbf{C})(\mathbf{B} \cdot \mathbf{D}) - (\mathbf{A} \cdot \mathbf{D})(\mathbf{B} \cdot \mathbf{C})$$

Derivatives of Sums

- 000 O 000 -

$$\nabla(f + g) = \nabla f + \nabla g$$

$$\nabla \cdot (\mathbf{A} + \mathbf{B}) = \nabla \cdot \mathbf{A} + \nabla \cdot \mathbf{B}$$

$$\nabla \times (\mathbf{A} + \mathbf{B}) = \nabla \times \mathbf{A} + \nabla \times \mathbf{B}$$

Derivatives of Products

$$\nabla(fg) = f\nabla g + g\nabla f$$

$$\nabla(\mathbf{A} \cdot \mathbf{B}) = \mathbf{A} \times (\nabla \times \mathbf{B}) + \mathbf{B} \times (\nabla \times \mathbf{A}) + (\mathbf{A} \cdot \nabla)\mathbf{B} + (\mathbf{B} \cdot \nabla)\mathbf{A}$$

$$\nabla \cdot (f\mathbf{A}) = f(\nabla \cdot \mathbf{A}) + \mathbf{A} \cdot (\nabla f)$$

$$\nabla \cdot (\mathbf{A} \times \mathbf{B}) = \mathbf{B} \cdot (\nabla \times \mathbf{A}) - \mathbf{A} \cdot (\nabla \times \mathbf{B})$$

$$\nabla \times (f\mathbf{A}) = f(\nabla \times \mathbf{A}) - \mathbf{A} \times (\nabla f)$$

$$\nabla \times (\mathbf{A} \times \mathbf{B}) = \mathbf{A}(\nabla \cdot \mathbf{B}) - \mathbf{B}(\nabla \cdot \mathbf{A}) + (\mathbf{B} \cdot \nabla)\mathbf{A} - (\mathbf{A} \cdot \nabla)\mathbf{B}$$

Second Derivatives

$$\nabla \times (\nabla \times \mathbf{A}) = \nabla(\nabla \cdot \mathbf{A}) - \nabla^2 \mathbf{A}$$

$$\nabla \cdot (\nabla \times \mathbf{A}) = 0$$

$$\nabla \times (\nabla f) = 0$$

Integral Theorems

$$\int_V (\nabla \cdot \mathbf{A}) dV = \oint_S \mathbf{A} \cdot \hat{\mathbf{n}} dS \quad \text{Gauss's (divergence) Theorem}$$

$$\int_S (\nabla \times \mathbf{A}) \cdot \hat{\mathbf{n}} dS = \oint_C \mathbf{A} \cdot d\boldsymbol{\ell} \quad \text{Stokes's (curl) Theorem}$$

$$\int_a^b (\nabla f) \cdot d\boldsymbol{\ell} = f(b) - f(a)$$

$$\int_V (f\nabla^2 g - g\nabla^2 f) dV = \oint_S (f\nabla g - g\nabla f) \cdot \hat{\mathbf{n}} dS \quad \text{Green's Theorem}$$

Physical Constants

$c = 2.998 \times 10^8 \text{ m/s}$	Speed of light
$\mu_0 = 4\pi \times 10^{-7} \text{ N/A}^2 \text{ (or H/m)}$	Permeability constant in vacuum
$\epsilon_0 = \frac{1}{\mu_0 c^2} = 8.854 \times 10^{-12} \text{ C}^2/\text{Nm}^2 \text{ (or F/m)}$	Permittivity constant in vacuum
$\frac{1}{4\pi\epsilon_0} = 10^{-7} c^2 = 8.988 \times 10^9 \text{ Nm}^2/\text{C}^2$	
$e = 1.602 \times 10^{-19} \text{ C}$	Magnitude of electron charge
$m_e = 0.9109 \times 10^{-30} \text{ kg}$	Electron mass

Useful Integrals

$$\int \frac{dx}{\sqrt{a^2 + x^2}} = \ln(x + \sqrt{a^2 + x^2})$$

$$\int \frac{dx}{a^2 + x^2} = \frac{1}{a} \arctan \frac{x}{a}$$

$$\int \frac{dx}{(a^2 + x^2)^{3/2}} = \frac{x}{a^2 \sqrt{a^2 + x^2}}$$

Binomial Expansion

$$(1 + \epsilon)^p = 1 + p\epsilon + \frac{p(p-1)}{2!} \epsilon^2 + \frac{p(p-1)(p-2)}{3!} \epsilon^3 + \dots$$

Notation for Position Vector

$$\mathbf{x} = \hat{\mathbf{i}}x + \hat{\mathbf{j}}y + \hat{\mathbf{k}}z$$

$$r = |\mathbf{x}| = \sqrt{x^2 + y^2 + z^2} \quad \text{and} \quad \hat{\mathbf{r}} = \frac{\mathbf{x}}{r}$$